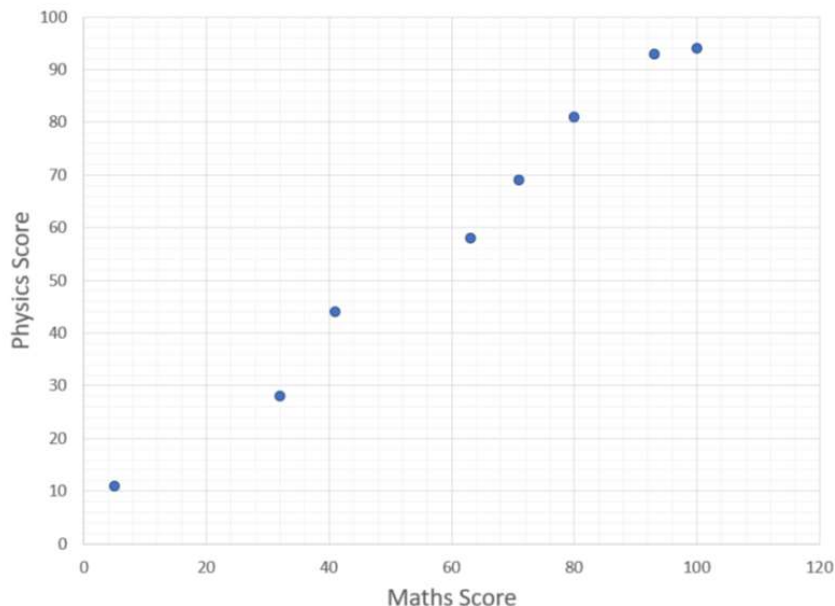


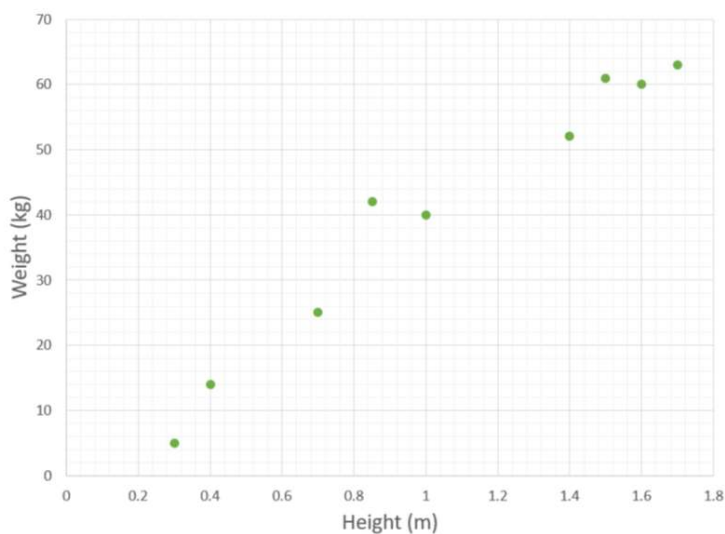
## Scatter Graphs

1. The graph shows a comparison of some pupils Physics scores vs their Maths scores in a Prelim examination.

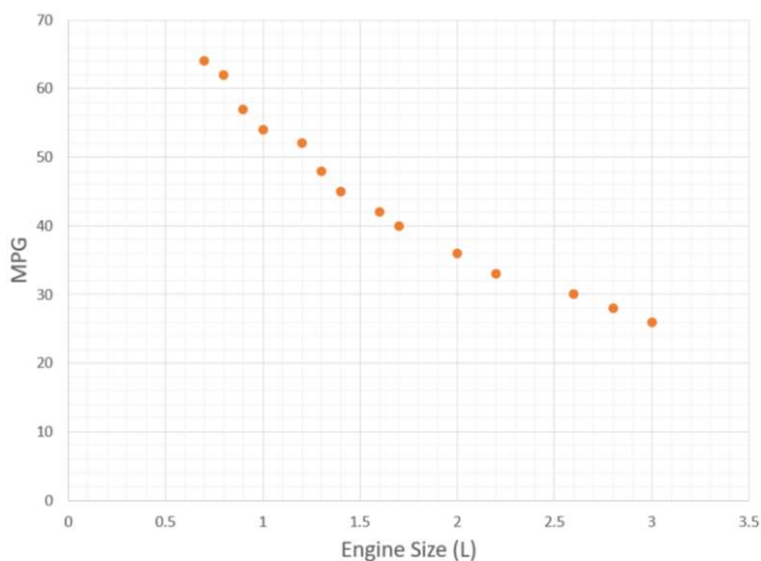


- Draw a line of best fit on the graph.
- What type of correlation does this graph have?
- Neil scored 50 in Maths, what would his estimate in Physics be?
- Amy scores 90 in Physics and thinks she would score Higher in Maths. Is she correct?

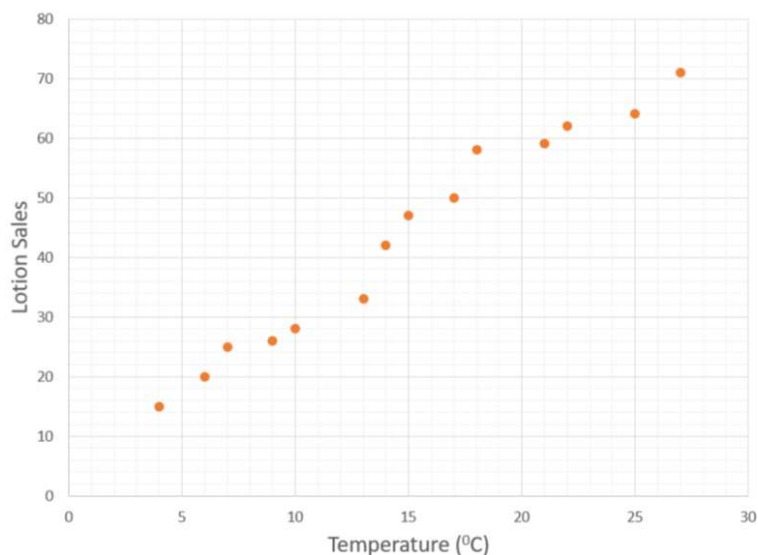
2. This graph shows the weight vs height of a sample of people.
- What was the lowest weight?
  - What was the tallest height?
  - Draw a line of best fit.
  - Use your line to estimate the weight of someone who is 1.2m.



3. The graph below shows the relationship between the Engine size of a car and the miles per gallon of fuel.

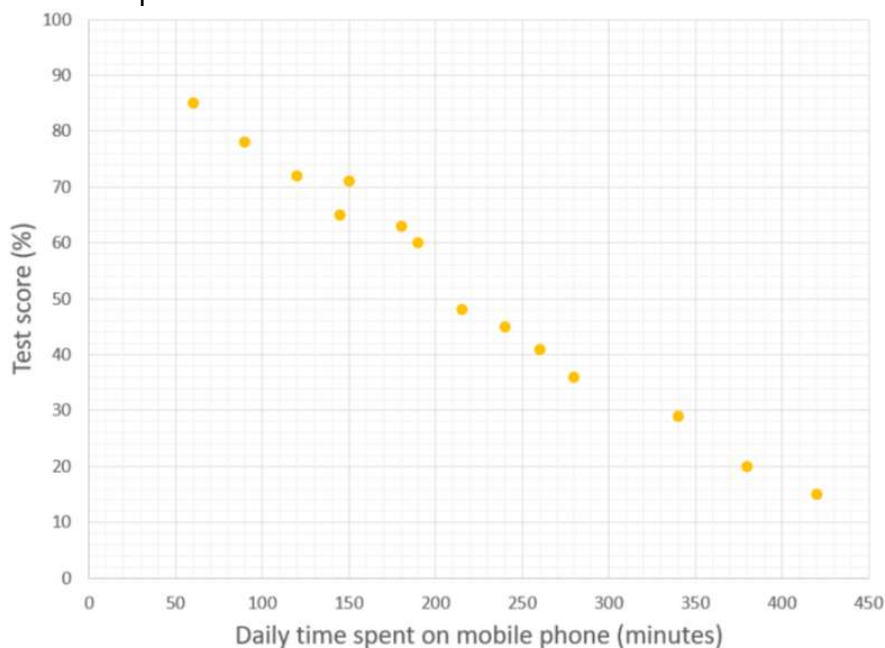


- Draw a line of best fit for the graph.
  - What type of correlation does this graph have?
  - Use your line to estimate the MPG for a 1.8L car.
  - Why do you think there are no numbers below 0.5L?
4. A shop records the sales of sun tan lotion compared to the temperature. They plot the results on this scattergraph.



- Draw a line of best fit on the diagram.
- Explain the general trend of the graph.
- Use your line to estimate the sales if it was 12°C.
- What would you expect the sales of lotion to be at 0°C?
- How could they increase sales during colder weather?

5. The graph below show pupils test scores measured against their average daily time on their mobile phones.



- (a) Draw a line of best fit on the diagram.  
 (b) How did time on the mobile phone affect the score?  
 (c) If someone spent an average of 5 hours per day using their phone, what would their estimated score be?  
 (d) How could someone improve their score?
6. For each question below, plot a scatter graph and draw a line of best fit.

- (a) Height of a plant.

Days	1	2	3	4	5	6	7	8
Height	1.6	1.9	2.4	3.3	3.5	3.8	4.0	4.4

- (b) Coordinates on a graph.

x	1	2	3	4	5	6	7
y	4	6	7.5	10.5	12	13.5	16

- (c) Temperature in an experiment.

Time (mins)	1	2	3	4	5	6	7	8
Temp( $^{\circ}$ C)	85	72	65	58	46	32	25	20